

GWALIOR GLORY SCHOOL

SUMMER HOLIDAY HOMEWORK ENGLISH (2024-25)

Class : IV

Name : _____ Sec. : _____ Roll No. : _____ Date : _____

- # The 'Holiday Assignment' must be done in a very neat and presentable manner.
- # Complete the work as directed.
- # Submit the assignment in a self made folder and label the folder as well.

Q1. Reading and writing skills

- ◆ Just like the cook whips up a recipe by putting in special ingredients, an author creates a story by using special ingredients too! These are called 'story elements.'
- ◆ Read any one of the following books and prepare a scrap book / chart / collage with pictures based on theme, setting, characters and author of the story.
- ◆ Conclude it with a book review in your own words.
- ◆ You can use the following sub-headings for the review.
 - (a) Theme
 - (b) My favourite character and why I liked it.
 - (c) Any one character that I would like to change.
 - (d) New words learnt and looked up in the dictionary.
 - (e) How many days I took to complete the book.
- ◆ Books suggested for reading-
 1. Gulliver's Travel – by Jonathan Swift
 2. Malgudi Adventure – by R.K. Narayan
 3. School Days – by Ruskin Bond

Q2. Learning values.

Write a short paragraph on how you interacted with your grandparents and what all you learnt from them. Try to know them better by discussing their likes and dislikes. Do some fun-filled activities with them, click pictures, create memories and present it on an A-4 size sheet in a creative manner.

Q3. CRISPY CROP: Adverbs describe verbs, adjectives, or other adverbs by telling how, when, where, or to what degree.

Underline the **adverb** you find in each sentence. Then, find it in the puzzle and circle it.

1. The corn was growing well.
2. It grew high in the field.
3. Daily it seemed greener.
4. The farmer watered it often.
5. Now he could relax.
6. His job was almost done.
7. Suddenly a strong wind came.
8. The farmer nervously watched his crop.
9. He put the corn out to dry.
10. A spark quickly set fire to it.
11. The corn ears fell down.
12. The popped happily into a field of popcorn.
13. The farmer carefully bagged his crop.
14. He would have popcorn tomorrow.
15. Could you eat popcorn forever?



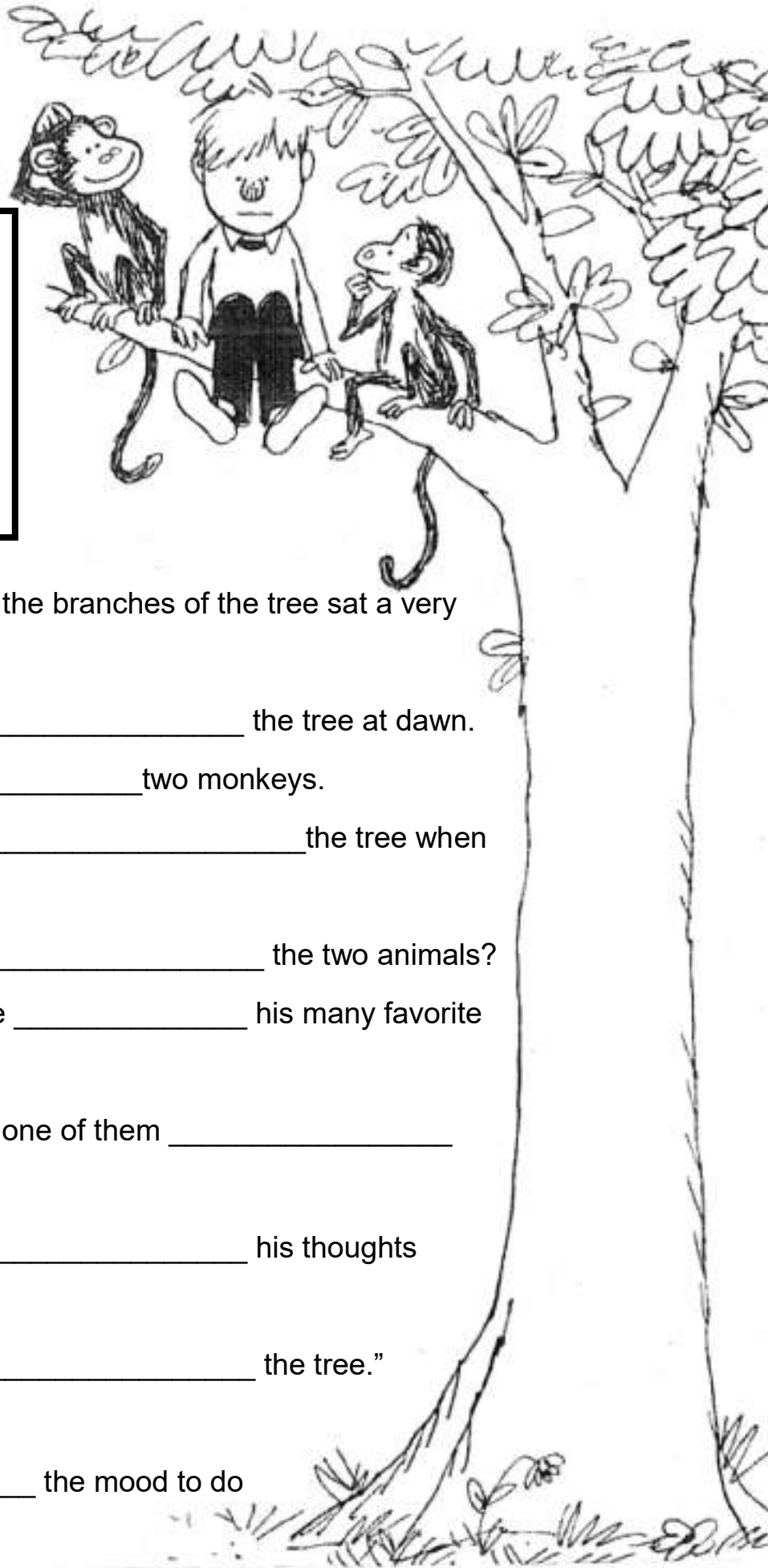
| | | | | | | | | | | | |
|---|---|---|---|---|---|---|---|---|---|---|---|
| D | O | W | N | I | P | Z | C | Q | L | M | O |
| S | U | N | E | L | I | P | O | U | D | Y | T |
| T | T | U | R | R | L | R | F | I | A | L | O |
| R | F | T | V | C | S | O | T | C | I | H | M |
| W | O | N | O | W | S | U | E | K | L | A | O |
| E | R | S | U | D | D | E | N | L | Y | P | R |
| L | E | C | S | H | I | G | H | Y | R | P | R |
| L | V | A | L | M | O | S | T | R | I | I | O |
| Y | E | R | Y | O | O | P | S | O | P | L | W |
| C | R | C | A | R | E | F | U | L | L | Y | T |

Q5. SERIOUS SAM: Fill in the blanks below with one of these words:

Between is used when speaking of two things.

Among is used when speaking of more than two things.

In tells where a person or thing is.



1. _____ the branches of the tree sat a very serious boy.
2. He had climbed _____ the tree at dawn.
3. Sam was _____ two monkeys.
4. The monkeys were _____ the tree when he came.
5. What was a boy doing _____ the two animals?
6. He was trying to decide _____ his many favorite things to do.
7. He had time to do only one of them _____ school and home.
8. The monkeys came _____ his thoughts and the beautiful day.
9. "Let's play _____ the tree." they seemed to say.
10. "I'm _____ the mood to do just that!" Sam replied.

GWALIOR GLORY SCHOOL

SUMMER HOLIDAY HOMEWORK

HINDI (2024-25)

Class : IV

Name : _____ Sec. : _____ Roll No. : _____ Date : _____

(1) दिए गए राज्यों में मनाएँ जाने वाले फसलों के त्योहार के नाम लिखिए।

- | | |
|-----------------|-----------------------|
| 1) बिहार _____ | 2) असम _____ |
| 3) केरल _____ | 4) तमिलनाडु _____ |
| 5) पंजाब _____ | 6) झारखंड _____ |
| 7) गुजरात _____ | 8) उत्तर प्रदेश _____ |

(2) सारिणी को पूरा करिए:-

| राज्य | भाषा | लिपि |
|---------------|-------|-------|
| 1) पंजाब | _____ | _____ |
| 2) ओडिशा | _____ | _____ |
| 3) महाराष्ट्र | _____ | _____ |

(3) प्रश्न-उत्तर:-

प्र01 भारत में कुल कितने राज्य व केन्द्र शासित प्रदेश हैं?

उ0 _____

प्र02 भारत के उत्तर में कौन सी पर्वतमाला हैं?

उ0 _____

प्र03 अपने पसंदीदा खेल के खिलाड़ियों का एक कोलार्ज बनाएँ एवं उस खेल से संबंधित दो लाइन लिखें।

प्र04 "जल संरक्षण" से संबंधित एक पोस्टर बनाइए (ए4 साइज पेज पर) एवं जल संरक्षण के उपाय अपने शब्दों में लिखें। (कोई-पाँच)

NOTE: (1) प्रतिदिन एक पेज सुलेख का अभ्यास करें।

(2) व्याकरण पुस्तक में से विलोम शब्द एवं पर्यायवाची शब्द याद करें।

(4) गोले में लिखे शब्द का अर्थ जानकर उदाहरण के अनुसार दूसरा शब्द मिलाकर तथा शब्द बनाओ और लिखो:-

सह-साथ

- मत - सहमत
- गान - _____
- चर - _____
- पाठी - _____

सु-अच्छा

- लभ - सुलभ
- गम - _____
- लेख - _____
- रांध - _____






वि-विशेष

- ज्ञान - विज्ञान
- ख्यात - _____
- शिष्ट - _____
- जय - _____

निर्-बिना

- मल - निर्मल
- जल - _____
- दोष - _____
- आदर - _____

(5) दिए गए चित्रों के माध्यम से बंदर और मगरमच्छ की वार्तालाप को लिखो:-



(6) बताओ मैं कौन हूँ:- (व्याकरण संबंधित पहेलियाँ)

- 1) बार-बार मैं न लूँ नाम, यह वह कह कर करता काम
- 2) मैं करती हूँ हर दम काम, छिपा काम में मेरा नाम
- 3) यह सफ़ेद हैं, वह है काला, मैं हूँ गुणों को बताने वाला
- 4) एक एनेक का ज्ञान कराता, भाषा में मैं क्या कहलाता
- 5) स्त्री और पुरुष का भेद बताता, बेलो मैं क्या कहलाता

(7) दिए गए चित्र के आधार पर कहानी लिखिए:-



GWALIOR GLORY SCHOOL

SUMMER HOLIDAY HOMEWORK MATHEMATICS (2024-25)

Class : IV

Name : _____ Sec. : _____ Roll No. : _____ Date : _____

1) The PIN code represents a system which divides the country into different regions. So for better communication codes are given to different cities.

Find the PIN code of Delhi, Lucknow, Mumbai and Gwalior.

- Present the above data in a tabular form.
- Write the sum of PIN code of Delhi and Mumbai _____.
- Write the PIN code of Gwalior in Indian number system. _____.

| Cities | Pin code |
|--------|----------|
| | |
| | |
| | |
| | |

2) Do you know:-

Century → 100 Years

Decade → 10 Years

Weeks → 7 Days

Year → 365 Days

Fortnight → 15 Days

Now, match the following:-

- Decade 4th July 1999 to 11th July 1999 _____
- Year 26th August 1717 to 26th August 1817 _____
- Century 15th June 1979 to 15th June 1989 _____
- Fortnight 2nd April 2004 to 16th April 2004 _____
- Week 2nd May 1614 to 2nd May 1615 _____

3) There are seven balls with numbers written on them:-



Rearrange the balls to form the numbers according to the clues.

- a) Form the smallest number using all the digits _____.
- b) Write a number that is less than 54,00,000 _____.

4) Create any two stick figures of sports using lines and shapes:-



5) A pitch or a sports ground is an outdoor playing area for various sports. A sports ground is considered as the soul of the game and one cannot imagine a game without a ground. So, here we have some task related to:

Using 2D shapes, prepare a playground on a A-4 size sheet. (Make any one)

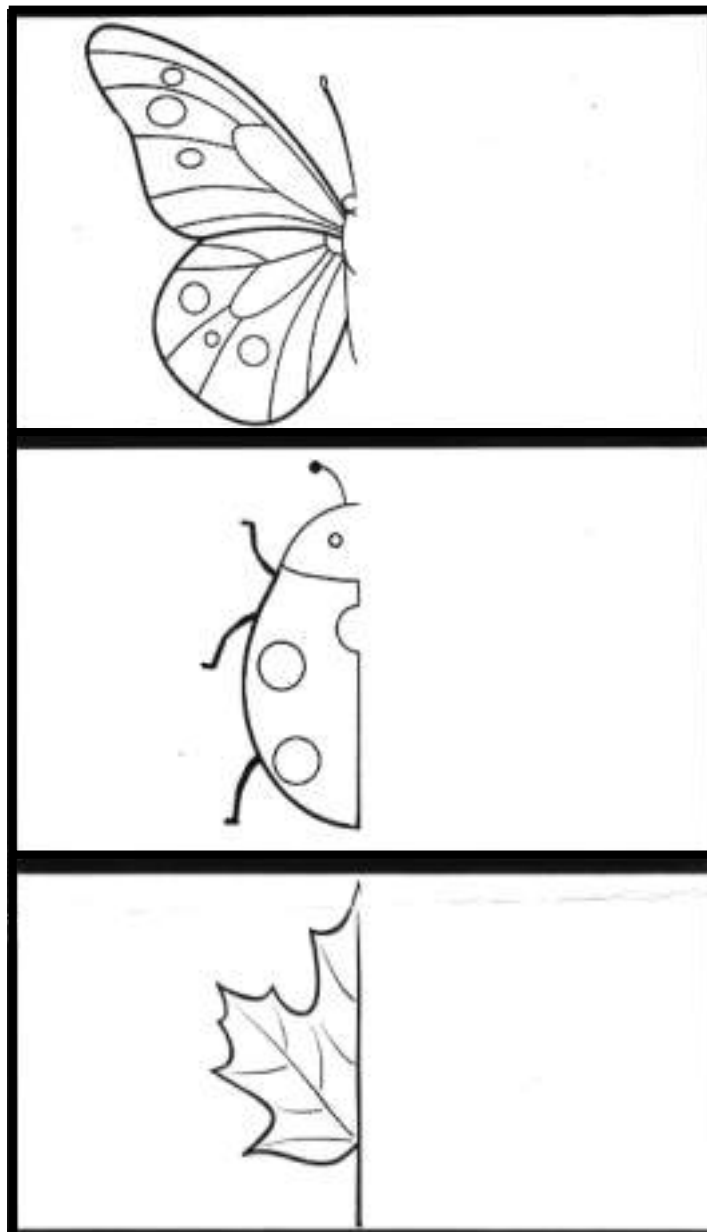
- a) Cricket ground
- b) Football ground
- c) Badminton court / ground
- d) Hockey ground

Use colourful florescent sheets to give it a beautiful look.



6) Paste the picture of any two things from nature which are symmetrical:- (like leaf, lemon etc.)



Now, complete the following symmetrical figure.



7) Help the bee find his way to the flower! (Count by 2's):-

| | | | | | | | | | | |
|---|----|-----|-----|-----|-----|-----|-----|---|-----|-----|
|  | | | 2 | 7 | 15 | 17 | 26 | 28 | 99 | 99 |
| | | | 4 | 6 | 9 | 22 | 24 | 30 | 99 | 9 |
| | | | 10 | 8 | 18 | 20 | 39 | 32 | 34 | 36 |
| 88 | 81 | 79 | 12 | 14 | 16 | 45 | 44 | 42 | 40 | 38 |
| 83 | 82 | 80 | 61 | 63 | 49 | 48 | 46 | 47 | 44 | 39 |
| 86 | 84 | 78 | 60 | 58 | 52 | 50 | 53 | 142 | 144 | 40 |
| 88 | 74 | 76 | 62 | 56 | 54 | 105 | 138 | 140 | 146 | 41 |
| 90 | 72 | 70 | 64 | 117 | 116 | 118 | 136 | 150 | 148 | 149 |
| 92 | 71 | 68 | 66 | 112 | 114 | 120 | 134 |  | | |
| 94 | 96 | 102 | 104 | 110 | 124 | 122 | 132 | | | |
| 95 | 98 | 100 | 106 | 108 | 126 | 128 | 130 | | | |

GWALIOR GLORY SCHOOL

Class : IV

SUMMER HOLIDAY HOMEWORK SCIENCE (2024-25)

Name : _____ Sec. : _____ Roll No. : _____ Date : _____

Below given project will be marked for Term-1

1) **Working model of digestive system (link will be shared for reference)**

<https://pin.it/17qJb9rbH>

OR

To make a 3-D model showing life cycle of a butterfly.

<https://pin.it/6X98vgfnu>

2) **Complete the given worksheets.**

HUMAN BODY COUNT

Q1 Write the correct number:

1. Number of milk teeth _____
2. Number of adult teeth _____
3. Number of ribs _____
4. Number of bones in a baby _____
5. Number of bones in an adult _____
6. Minimum number of hours required to digest food _____
7. Normal body temperature _____
8. Muscles needed to smile _____
9. Muscles needed to frown _____
10. Hardest structure in body _____
11. Smallest bone in human body _____
12. Longest bone in human body _____
13. Largest organ in human body _____
14. Floating bone in human body _____

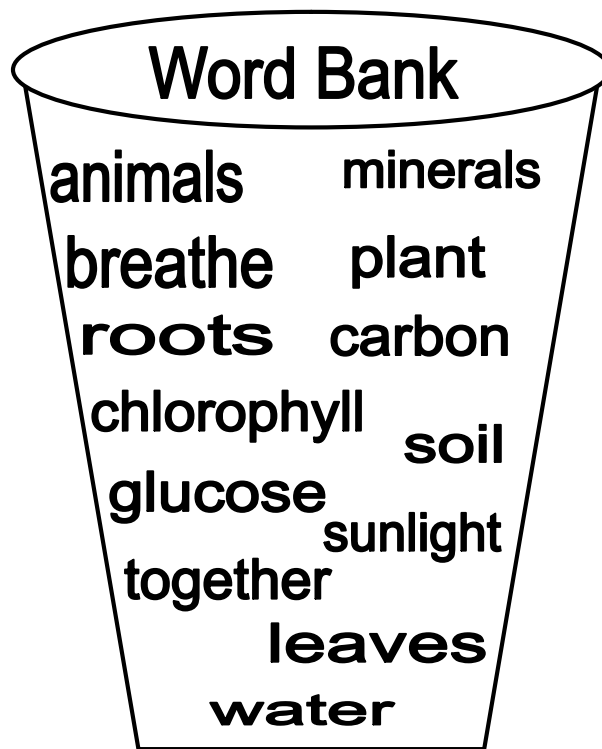
Name : _____ Sec. : _____ Roll No. : _____ Date : _____

BASED ON THE GREEN MACHINE

Q1 Find out how a green plant gets its food. Complete each sentence. Use the word bank.

1. A green makes its own food.
2. The plant and the sun work to do this.
3. The takes in what the plant needs from the ground.
4. Roots drink .
5. Roots also take in minerals from the .
6. But the roots cannot make food without the .
7. The leaves contain a green substance called .
8. The chlorophyll in the leaves uses dioxide to help make food.
9. Carbon dioxide is in the air that people and animals out.
10. A plant also uses the energy from the to help make its food.
11. Sunlight helps turn water, and carbon-dioxide into a sugary food for the plant.
12. This sugary food is called .
13. As the plant makes food, it off oxygen.
14. People and need oxygen to live.

What is it called when plants use sunlight to make their own food? To find out, match the boxed letter in each sentence to a line below.




Q2 Which of these is

- | | | | |
|---------------------------|----------|----------|---------------|
| 1. not a disease? | measles, | typhoid, | fracture |
| 2. not a joint? | hip, | wrist, | stomach |
| 3. not a food group? | fruit, | protein, | carbohydrates |
| 4. not a vitamin? | A, | B, | H |
| 5. not inside your chest? | heart, | lungs, | brain |
| 6. not a sense organ? | skin, | eyes, | hair |

PUZZLE TIME

Q3 Solve the given puzzle (based on photosynthesis)



Across

- 1 Part of a plant cell gathers light energy.
- 5 Waste product of photosynthesis
- 7 Photosynthesis uses this form of energy to drive the process.
- 8 Compound produced by photosynthesis

Down

- 1 Part of plant that contains chlorophyll.
- 2 Name the entire process in which a plant produces its own food.
- 3 One of the two compounds converted during photosynthesis.
- 4 Chlorophyll gives plant life this colour.
- 6 Other compound converted during the process of photosynthesis.

GWALIOR GLORY SCHOOL

SUMMER HOLIDAY HOMEWORK SOCIAL SCIENCE (2024-25)

Class : IV

Name : _____ Sec. : _____ Roll No. : _____ Date : _____

NOTE:

- 1 Do any one project out of two.
- 2 This project will be marked for Term1
- 3 Submit the project on the given date: _____. [label the project neatly]

◆) PROJECT-1:

(A) Make a model of volcanic mountain with the help of waste paper, cardboard, colourful dough, cotton etc. [Refer the picture provided]



OR

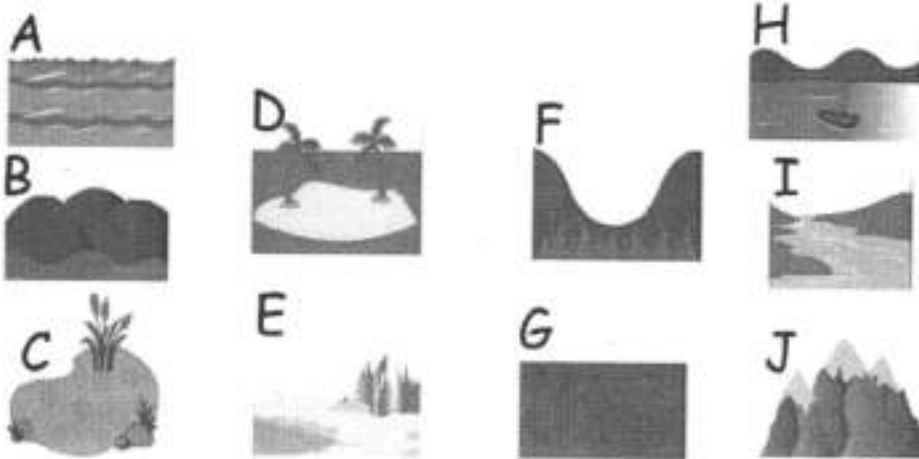
◆) PROJECT-2:

(B) Make a scrapbook sharing the information about Kanha Tiger Reserve and Bandhavgarh National Park.

NOTE: Include the information about location way to reach at that point, species found, best time to visit, area in sq.km.

Q.1 'Earth's physical features are the natural formations'. Read the hint given then name the landform and match these with correct picture:


****Guess who I am, write my name then my picture number.**



- (1) I am a large and flat land. _____ ()
- (2) I am surrounded by water. _____ ()
- (3) I am a large body of moving ice. _____ ()
- (4) I am the largest body of water on earth. _____ ()
- (5) I am a group of small streams join together. _____ ()

- (6) I am a small body of water formed when water fill low places. And I am bigger than a pond. _____ ()
- (7) I am very high and large. _____ ()
- (8) I am low land between mountains and hills. _____ ()
- (9) I am high but not as high as a mountain. _____ ()
- (10) My body is formed when water fills low places, but I am smaller than a lake. _____ ()

Q.2 Direction:- Use the map to complete the sentences below. Refer the map key and the directions mentioned.



LITTLE TOWN

- (1) The town is _____ of the forest. [North, South, East, West]
- (2) The lake is _____ of the river. [North, South, East, West]
- (3) The river is _____ of the mountains. [North, South, East, West]
- (4) The town is _____ of the plain. [North, South, East, West]
- (5) The forest is _____ of the river. [North, South, East, West]
- (6) The hills are _____ of the plain. [North, South, East, West]

Q.3 'Martial arts is the term used to describe different ways of attacking an enemy or defending oneself.

Paste the picture of the following forms of martial arts and explain them in 2-3 lines, also mention the country from where they have originated.

| | | IMAGE | INFORMATION |
|----|-----------------|--------------|--------------------|
| 1. | Kung-fu | | |
| 2. | Taekwondo | | |
| 3. | Kalaripayattu | | |
| 4. | Karate & Kyudo | | |
| 5. | Shaolin Kung fu | | |

GWALIOR GLORY SCHOOL

SUMMER HOLIDAY HOMEWORK

GK (2024-25)

Class : IV

Name : _____ Sec. : _____ Roll No. : _____ Date : _____

- 1) Paste pictures of any five sports – person (your favourite). Write their name & name of the sport they are associated with. Also, write the name of the cup given for that particular sports.
- 2) On a white sheet of paper write names of any 10 wild life sanctuaries / national parks located in India. Write the name of the state in which that sanctuary is located and also mention the name of the animals it conserves.
- 3) **RAMAYANA SEARCH:** Find and circle these in the square. They write them on the blank.



| | | | | | | | | | | | | | |
|---|---|---|---|---|---|---|---|---|---|---|---|---|---|
| L | A | W | J | F | E | R | B | Q | P | I | M | S | V |
| U | D | H | A | N | U | M | A | N | G | K | N | U | I |
| V | B | X | N | Z | H | J | L | Q | A | L | R | M | B |
| V | M | D | A | N | A | H | I | L | Y | A | H | I | H |
| K | E | G | K | H | U | L | E | Y | F | U | I | T | I |
| U | G | Q | A | Y | V | Q | W | E | R | T | Y | R | S |
| S | H | U | I | O | P | U | L | A | S | T | Y | A | H |
| H | N | P | A | S | D | F | G | H | J | K | L | Z | A |
| X | A | M | A | N | T | H | A | R | A | X | V | B | N |
| N | D | M | S | F | J | K | H | R | E | S | W | J | A |
| N | R | S | U | R | P | A | N | A | K | H | A | T | U |
| B | N | V | R | Y | U | Q | W | X | T | I | F | H | G |
| S | Q | U | I | R | R | E | L | H | F | V | J | K | I |



1) The monkey god who burnt the city of Lanka: _____

2) Sugriva's brother who usurped his throne: _____

3) Sita's father: _____

4) The Rishi's wife who was cursed to become a stone. She turned back into a human when Ram's foot accidentally touched her: _____

5) Ravana's father: _____

6) Rama's twin sons: _____ and _____

7) Indrajeet's other name: _____

8) Kaikeyi's maid who gave her bad advice: _____

9) Ravana was His devotee: _____

10) Lakshmana's mother: _____

11) Ravana's brother who ruled Lanka after the war: _____

12) The rishi who looked after Sita, Luv and Kush after she was banished by Ram: _____

13) Lakshmana cut off her nose: _____

14) An animal which is supposed to have got its stripes because Rama stroked its back: _____



GWALIOR GLORY SCHOOL

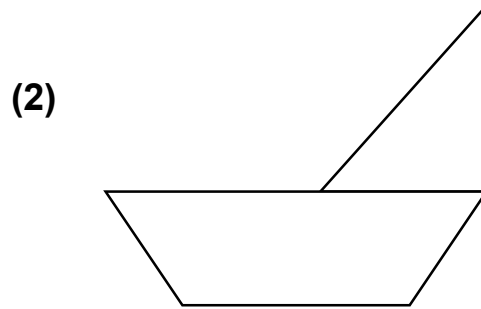
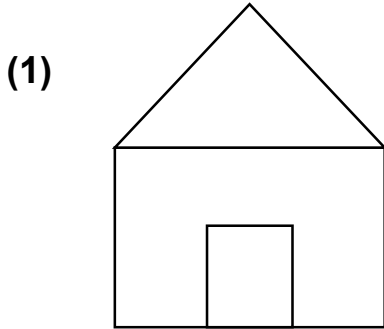
Class : IV

SUMMER HOLIDAY HOMEWORK COMPUTER (2024-25)

Name : _____ Sec. : _____ Roll No. : _____ Date : _____

- ◆ Prepare a creative folder and write down the codes for the Turtle of LOGO application for below given letters and images.

LETTERS:- A, M, N, K, E



GWALIOR GLORY SCHOOL

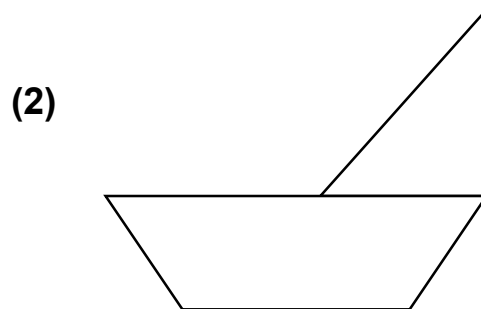
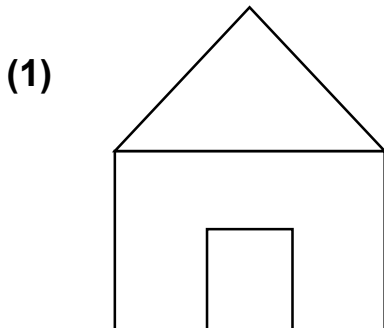
Class : IV

SUMMER HOLIDAY HOMEWORK COMPUTER (2024-25)

Name : _____ Sec. : _____ Roll No. : _____ Date : _____

- ◆ Prepare a creative folder and write down the codes for the Turtle of LOGO application for below given letters and images.

LETTERS:- A, M, N, K, E



GWALIOR GLORY SCHOOL

Class : IV

SUMMER HOLIDAY HOMEWORK (2024-25)

Art & Craft

Name : _____ Sec. : _____ Roll No. : _____ Date : _____

CRAFT:

- 1) Make five creative "bookmark".
- 2) Using work material make a small "bird feeder"

ART:

- 1) Prepare any one "Madhubani Painting" (example-1 given below)
- 2) Draw and colour "Village scene"
- 3) Draw the picture of "Shapes" and Shade it with a pencil. (example-2 given below)

NOTE: Art work should be done in drawing notebook.



Example-1



Example-2